

Select ONE model from page 4 that you will compare your New Zealand urban settlement with.

Assessor's  
use only

Selected model: Sector Model (Hoyt)

- (a) **Explain in detail TWO similarities** between the land-use patterns of your New Zealand urban settlement and those shown by your selected model.

Include **specific information** about your urban settlement.

**First similarity** between your settlement and model: is in the middle is the central Business District on the sector Model is where your Urban settlement (Auckland) is, because it is also busy because it's where all the businesses are and where the university is.

\* No specific or general case study information.

\* No 'explanation' given for why Auckland is similar to the model.

**Second similarity** between your settlement and model: is all the low-cost residential are closest to the centre of the urban settlement (Auckland) because it's always busy and noisy when your living near businesses and it's there's alot of noise because it's crowded with people going to places like their jobs and going to university.

\* incorrect information: Low cost residential areas in Auckland are not close to the CBD.

- (b) **Explain in detail TWO differences** between the land-use patterns of your New Zealand urban settlement and those shown by your selected model.

Assessor's  
use only

Include **specific information** about your urban settlement.

**First difference** between your settlement and model: is where your Urban settlement (Auckland) is in the middle of the sector model ~~but~~ but there are other urban settlements in Auckland like the North shore, ~~Manukau~~ Manukau city, etc... That is why it also doesn't fit with the sector Model. But Auckland is the main Urban Settlement.

\* Description of differences - no explanation.

**Second difference** between your settlement and model: The High-cost resident is not on one side of Auckland but on all side because these heaps of houses that costs heaps. and there are heaps of houses around Auckland that aren't close that cost heaps.

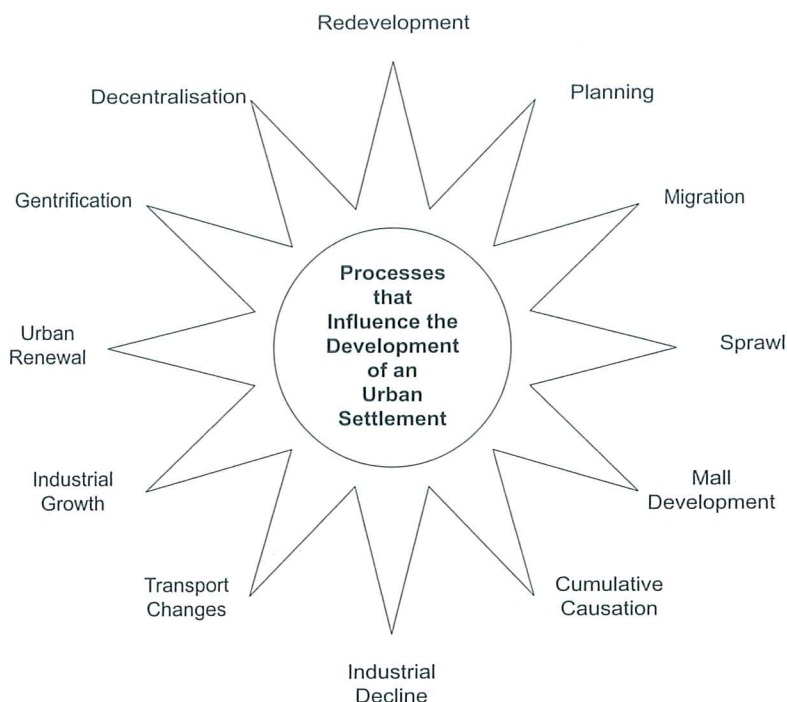
\* No explanation exists.

cd.

## OR: QUESTION TWO: PROCESSES THAT INFLUENCE DEVELOPMENT

Assessor's  
use only

The diagram below shows some of the processes that can influence the development of an urban settlement.



Select TWO of these processes (or any other relevant processes), and **explain in detail** how EACH has significantly influenced the development of your New Zealand urban settlement.

Use **specific information** about your urban settlement, which should include labelled sketches, maps, or diagrams, within your answer.

Process (1):

~~urban~~ sprawl //

How the process influenced development:  sprawl is one of the major factors in the development of Auckland. Auckland's growth ~~has~~ has been so rapid that no plans were made to control it and it just expanded all out over the countryside. This resulted in a very spread out, and untidy city. This means Auckland has a lot of congestion, and accessibility is very poor, especially into the CBD. //

\* only 1 explanation - congestion - of how urban sprawl has influenced Auckland's development. General case study information only.

Process (2): Transport changed

How the process influenced development: The Auckland harbour bridge ~~was~~ <sup>made a</sup> huge change ~~to~~ to Auckland. With ~~the~~ so much more area, opened up to the people this resulted in massive growth to northern Auckland. With Auckland's massive growth, congestion has become a major issue.

\* Only one influence on Auckland's development vaguely explained.  
- massive growth. Only general case study material.


N

Annotated sketch, map, or diagram, showing TWO land-use patterns:

Assessor's  
use only

Two land-use patterns in: Singapore (name of settlement)

Singapore



Key:

 social

\* map with  
no specific  
information on  
the patterns  
chosen. No  
information  
at all, to  
show the  
student understands  
the concept  
of urban patterns.

- (b) Select ONE of the land-use patterns that you have shown on page 10 and **explain in detail** why your chosen settlement has that particular pattern.

Assessor's  
use only

Include **specific information** about your chosen settlement to support your answer.

Land-use pattern:

Social

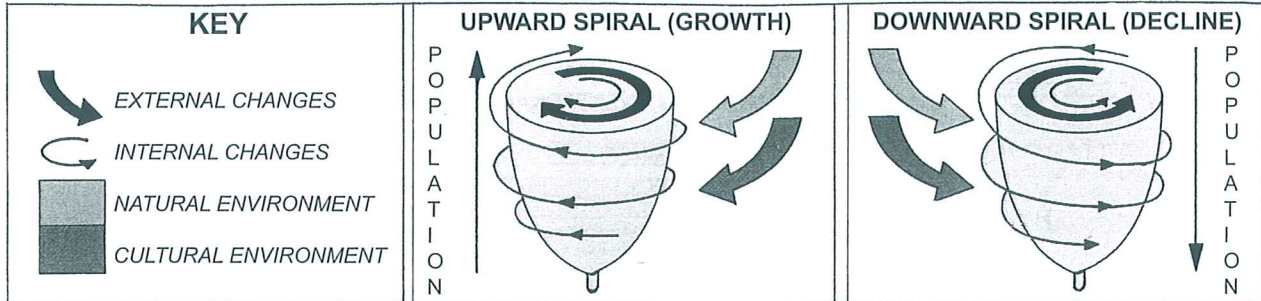
Reasons for that pattern:

Because Singapore is a country based on planned set ups, the neighbourhoods have been placed in this pattern to have better access to the city. Each neighbourhood is carefully placed around the structural zone, but also near other areas of opportunity. Singapore is socially placed more within the ~~middle~~ centre and right side of the island. The left has small social areas.

\* Does not discuss urban social patterns.  
No case study information.

**OR: QUESTION FOUR: CONSEQUENCES AND RESPONSES**Assessor's  
use only

Changes are constantly occurring in urban settlements. Both natural and cultural changes influence whether an urban settlement grows or declines. These changes may be internal or external to the settlement.

**Changes Influencing Urban Growth and Decline**

- (a) (i) In the boxes below, state TWO changes that would cause **urban growth** AND describe a possible consequence of EACH change.

Change causing urban growth (1):

urban sprawl//

Possible consequence of that change:

The city will sprawl outwards with no plan and things such as congestion and accessibility become major issues//

Change causing urban growth (2):

urban renewal//

Possible consequence of that change:

with all old slums removed there could be a quick, major increase in population which could cause congestion//

Chco(1)

Chco(2)

- (ii) In the boxes below, state TWO changes that would cause **urban decline** AND describe a possible consequence of EACH change.

Change causing urban decline (1):

Industrial decline//

Possible consequence of that change:

less jobs for the people so they start to leave and find jobs elsewhere//

Change causing urban decline (2):

Possible consequence of that change:

Chco(1)

(2)

- (b) Select ONE major change that has occurred in your overseas urban settlement and **explain in detail** both the **consequences** of and **responses** to that change.

Use **specific information** about your urban settlement, which should include labelled sketches, maps, or diagrams, within your answer.

Major change:

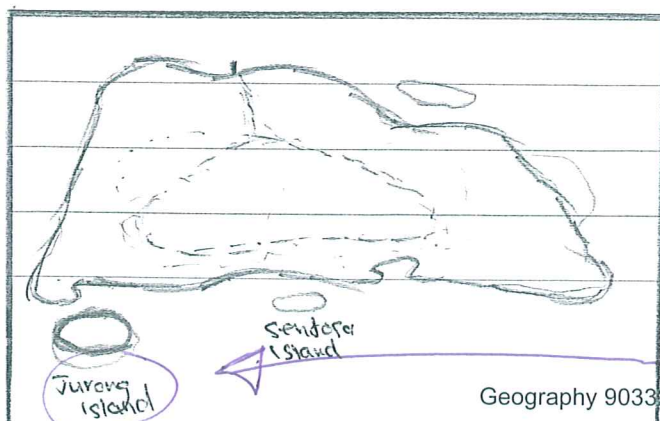
Transport change //

Consequences of that change: Congestion is the biggest consequence to transport changes. What congestion does is it holds people up from going places such as work <sup>and</sup> school, even if someone is delivering a package ~~to a house~~ somewhere they will be held up and the business can suffer due to extra costs of diesel. ~~etc.~~ //

\* no case study information  
Singapore's changes to transport relieve congestion.

Responses to that change: In Singapore there have been many responses to transport since the 1940s and 1950s. Chief among them bus lanes have been set up and people are being discouraged from using cars. Also MRT and an expressway have been set up to allow easier accessibility around the country. //

\* not enough explanation of the response



☐ - MRT  
Specific case study material on the diagram/map